

Ms.Rice SET Teacher

Maths Activities

First Class Room 13

June 2nd- June 5th

The activities below are in your Maths Folder that I left for collection last week.

If anyone wishes to contact me about the work please send an email to office@stlouisinfants.ie and reference it Ms.Rice.

Well done for all your great work.

Ms.Rice

Name : _____ Score : _____

Teacher : _____ Date : _____

Hundreds Chart

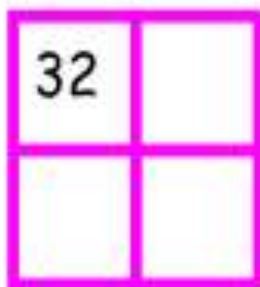
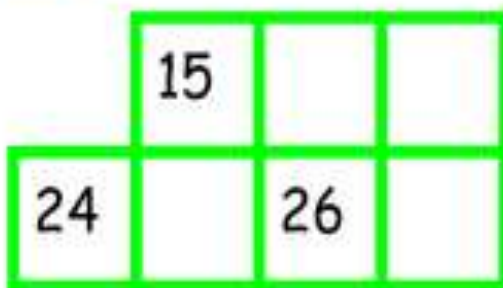

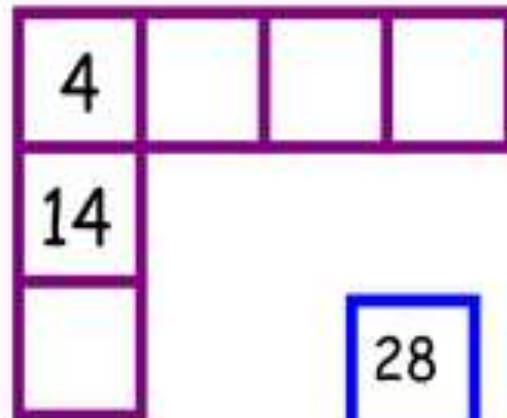
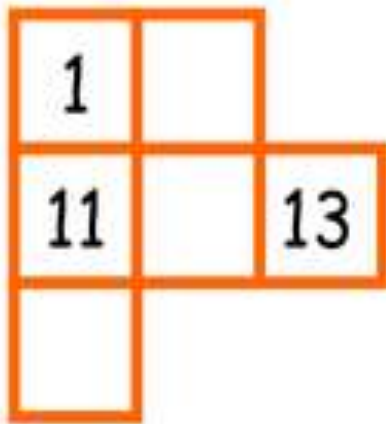
1	2	3	4	5	6	7	8	9	10
11	12	13	14	15	16	17	18	19	20
21	22	23	24	25	26	27	28	29	30
31	32	33	34	35	36	37	38	39	40
41	42	43	44	45	46	47	48	49	50
51	52	53	54	55	56	57	58	59	60
61	62	63	64	65	66	67	68	69	70
71	72	73	74	75	76	77	78	79	80
81	82	83	84	85	86	87	88	89	90
91	92	93	94	95	96	97	98	99	100



Name..... Date.....

Missing Numbers

WALT find the missing numbers from sections of a number square



Fill in the Missing Numbers

1		3				7		9	10
11			14	15		17	18		
	22						28	29	30
	32		34			37			40
41			44			47		49	50
51			54	55			58		60
61		63	64			67		69	70
	72	73		75	76		78		
81	82						88		90
91			94	95		97		99	100

Name _____

Before-Between- After

Directions: Write the number that comes before, between and after each number.

Before

___ 8

___ 17

___ 12

___ 1

___ 20

___ 44

___ 65



Between

1 ___ 3

20 ___ 22

8 ___ 10

14 ___ 16

31 ___ 33

19 ___ 21

11 ___ 13



After

6 ___

13 ___

29 ___

34 ___

17 ___

42 ___

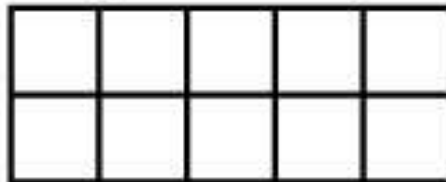
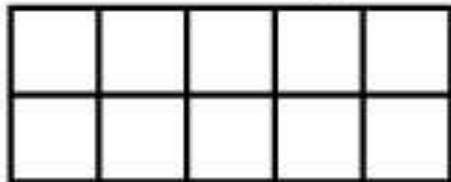
39 ___



The Number 19

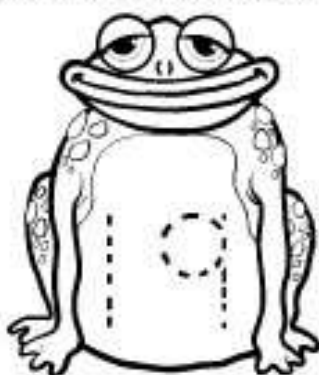

Choose one color to show 19 using ten frames.

Hint: Think how many "tens" and how many "ones" make up 19.



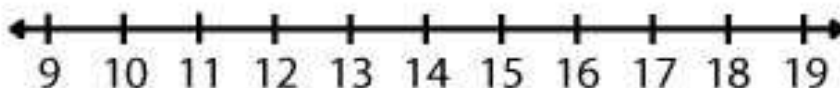
Before and After:

What numbers come before and after NINETEEN?


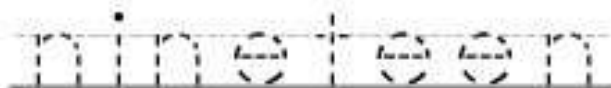
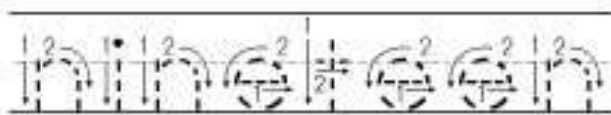
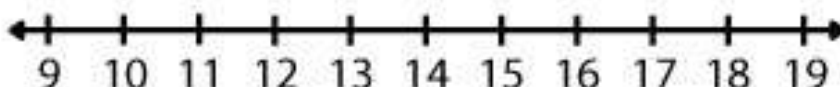


Use the number lines to answer the questions.

$19 - 12 = \square$



$19 - 16 = \square$



Is nineteen EVEN or ODD?
Color black if even and yellow if odd.



All these sums make 20, but what numbers are missing?

1. $3 + \boxed{} = 20$

2. $\boxed{} + 4 = 20$

3. $15 + \boxed{} = 20$

4. $\boxed{} + 8 = 20$

5. $7 + \boxed{} = 20$

Name _____

Date _____



TELLING THE TIME - HALF PAST SHEET 1

Write the correct time underneath each clock. The first one has been done for you.

Half past 2		

When the time is half past the hour, which number does the big hand point to?

